



第八单元综合测试卷



时间：60分钟

满分：100分

题号	一	二	三	四	五	六	总分
得分							

kàn shuí suàn de yòu kuài yòu duì

一、看谁算得又快又对。(15分)

$10+9=$

$15+3=$

$10+7=$

$7+4=$

$14+2=$

$8+7=$

$9+9=$

$6+5=$

$18+1=$

$11+4=$

$16+3=$

$7+3=$

$6+2+3=$

$4+5+10=$

$5+5+8=$

xiǎng yi xiǎng tián yi tián

二、想一想，填一填。(29分)

1. 我会做。(12分)

$$\begin{array}{c}
 9 + 8 = \square \\
 \begin{array}{c} \diagup \quad \diagdown \\ \square \quad \square \end{array} \\
 \begin{array}{c} | \quad | \\ \hline 10 \end{array}
 \end{array}$$

$$\begin{array}{c}
 6 + 9 = \square \\
 \begin{array}{c} \diagup \quad \diagdown \\ \square \quad \square \end{array} \\
 \begin{array}{c} | \quad | \\ \hline 10 \end{array}
 \end{array}$$

$$\begin{array}{c}
 7 + 8 = \square \\
 \begin{array}{c} \diagup \quad \diagdown \\ \square \quad \square \end{array} \\
 \begin{array}{c} | \quad | \\ \hline 10 \end{array}
 \end{array}$$

$$\begin{array}{c}
 5 + 6 = \square \\
 \begin{array}{c} \diagup \quad \diagdown \\ \square \quad \square \end{array} \\
 \begin{array}{c} | \quad | \\ \hline 10 \end{array}
 \end{array}$$



2. 括号里最大能填几。(8分)

$$(\quad) + 3 < 10 \quad 5 + (\quad) < 14 \quad (\quad) + 8 < 16$$

$$4 + (\quad) < 13 \quad (\quad) + 8 < 11 \quad 7 + (\quad) < 20$$

$$5 + 1 + (\quad) < 12 \quad 3 + 5 > 1 + 4 + (\quad)$$

3. 比一比。(在○里填上“>”“<”或“=”) (9分)

$$8 + 3 \bigcirc 10$$

$$13 + 5 \bigcirc 10 + 9$$

$$4 + 1 + 7 \bigcirc 2 + 1 + 9$$

$$5 + 7 \bigcirc 15$$

$$9 + 7 \bigcirc 6 + 8$$

$$6 + 5 + 2 \bigcirc 4 + 6 + 9$$

$$6 + 9 \bigcirc 16$$

$$5 + 5 \bigcirc 10 + 2$$

$$6 + 3 + 5 \bigcirc 7 + 5 + 4$$

wǒ huì lián

三、我会连。(8分)

$$12 + 7$$

$$14 + 2$$

$$10 + 10$$

$$10 + 8$$

20

19

18

16

$$9 + 7$$

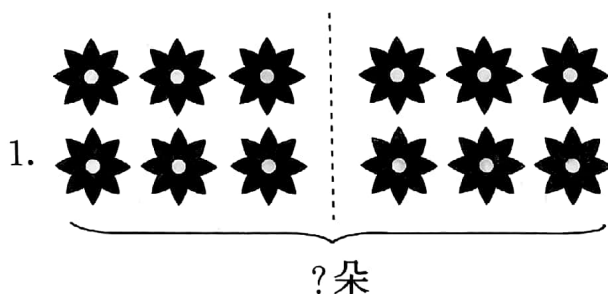
$$11 + 7$$

$$16 + 4$$

$$15 + 4$$


kàn tú liè shì jì suàn

四、看图列式计算。(16分)

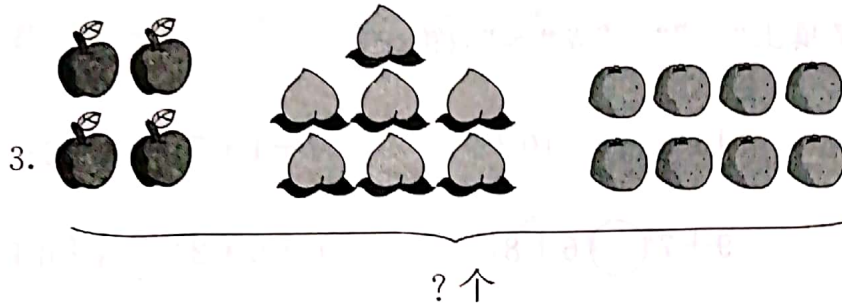


$$\square \bigcirc \square = \square \text{ (朵)}$$

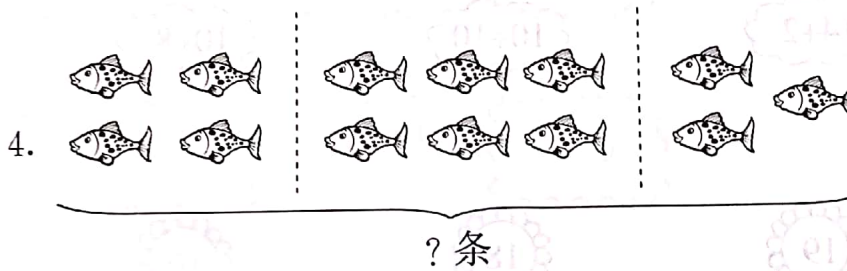




$$\square \bigcirc \square = \square \text{ (本)}$$




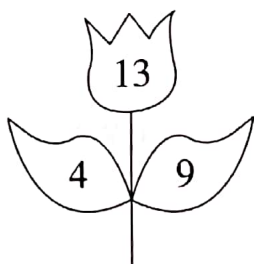


$$\square \bigcirc \square \bigcirc \square = \square \text{ (个)}$$




$$\square \bigcirc \square \bigcirc \square = \square \text{ (条)}$$

zhǎoguī lǜ zài yè zǐ huò huā shàng tián shàng hé shì de shù
五、找规律,在叶子或花上填上合适的数。(12分)




jiě jué wèn tí
六、解决问题。(20 分)

1. 植树节同学们去植树。(6 分)



他俩一共种了多少棵树?

2. 小丽和小明一共捡了多少个废塑料袋?(7 分)



3. 踢毽子。(7 分)



他们三个人,一共踢了多少下?

